


Solve each problem.

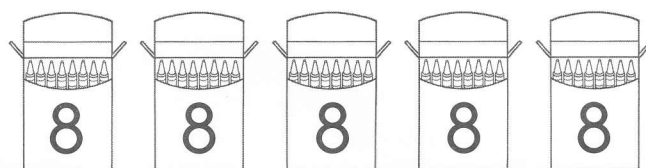
- 1 There are 3 flowers in each vase. There are 6 vases.  
How many flowers are there?

\_\_\_\_\_ flowers




- 2 There are 8 crayons in each box. There are 5 boxes of crayons. How many crayons are there?

\_\_\_\_\_ crayons



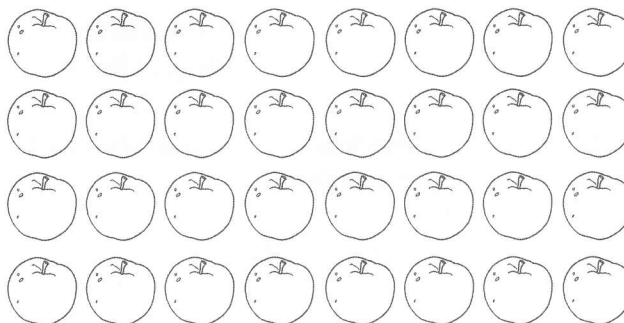
- 3 There are 4 rows of flowers. There are 3 flowers in each row. How many flowers are there?

\_\_\_\_\_ flowers



- 4 There are 4 rows of apples. There are 8 apples in each row. How many apples are there?

\_\_\_\_\_ apples



Tell how you got your answers.

**Solve each problem.**

- ① Sam has 15 apples. He places an equal number of apples on each plate. He has 3 plates. How many apples does he put on each plate?

\_\_\_\_\_ apples

- ② Lisa has 5 row of flowers. There are 5 flowers in each row. How many flowers are there?

\_\_\_\_\_ flowers

- ③ Tim is digging holes to plant seeds. Tim has 32 seeds. He puts 4 seeds in each hole. How many holes does he dig?

\_\_\_\_\_ holes

- ④ Jane is making 2 peach pies. She puts 8 peaches in each pie. How many peaches does she need?

\_\_\_\_\_ peaches

- ⑤ Piper has 16 slices of cheese. She puts 4 slices on each sandwich. How many sandwiches can she make?

\_\_\_\_\_ sandwiches

- ⑥ Ryan has 21 carrots. He puts 7 carrots in each basket. How many baskets does he need?

\_\_\_\_\_ baskets

**Tell how you got your answers.**

**Draw and array to solve each problem.**

- ① There are 3 rows of chairs. There are 5 chairs in each row. How many chairs are there?

\_\_\_\_\_ chairs

- ② There are 8 rows of flowers. There are 6 flowers in each row. How many flowers are there?

\_\_\_\_\_ flowers

- ③ There are 18 roses. There are 6 in each vase. How many vases are there?

\_\_\_\_\_ vases

- ④ There are 6 rows of cookies. There are 7 cookies in each row. How many cookies are there?

\_\_\_\_\_ cookies

- ⑤ There are 24 plants in the garden. There are 4 plants in each row. How many rows of plants are there?

\_\_\_\_\_ rows

- ⑥ There are 4 benches in the park. Each bench has 6 seats. How many seats are there?

\_\_\_\_\_ seats

- ⑦ Mike plants 45 seeds in equal rows. He plants 9 seeds in each row. How many rows does he plant?

\_\_\_\_\_ rows

- ⑧ David has 36 marbles. He wants to put 9 marbles in each bag. How many bags does he use?

\_\_\_\_\_ bags



**Tell how you know your answer is reasonable.**

**Solve.**

- 1 Elena has 8 pairs of shoes. How many shoes does she have in all?
- 2 Anita bakes 36 muffins. She put 9 muffins in each pan. How many pans of muffins did she make?
- 
- 3 Dan builds a wall with blocks. He puts 6 blocks in each row. He builds 9 rows. How many blocks does he use?
- 4 Marco picked 42 apples. He put them in 6 baskets. He put the same number of apples in each basket. How many apples did he put in each basket?
- Circle the letter for the correct answer.**
- 5 Lil has 4 pens. She has 5 times as many crayons. How many crayons does she have?
- a) 5 crayons
- b) 9 crayons
- c) 16 crayons
- d) 20 crayons
- 6 Dominic has 72 rocks in his collection. He keeps them in one full case with 8 rocks in each row. How many rows are in the case?
- a) 90 rocks
- b) 9 rows
- c) 7 rocks
- d) 7 rows